

Calc 3: Assignment 24

Note Title

11/9/2011


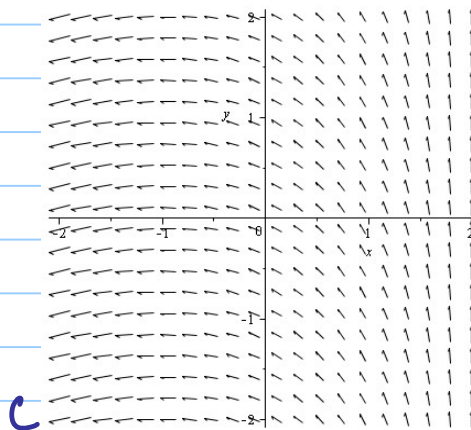
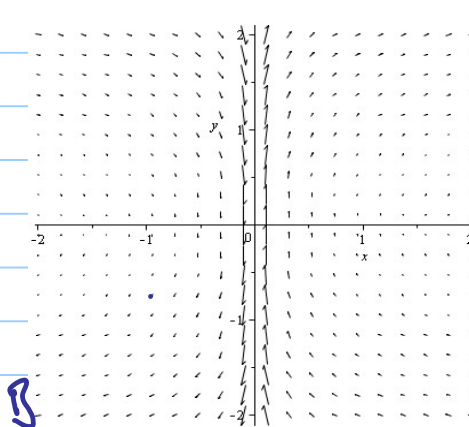
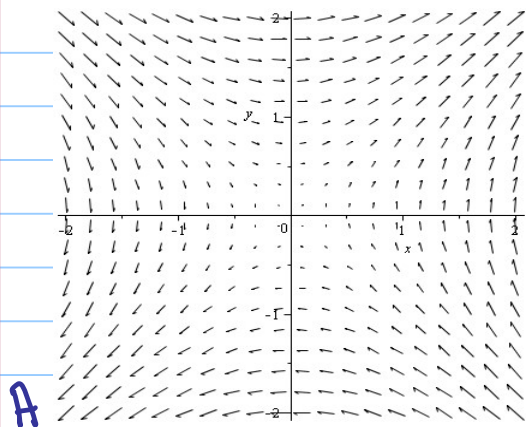
③ Match the vector fields with the plots:

a) $F(x,y) = \langle y, \frac{1}{x} \rangle$

s) $F(x,y) = \langle x-2, x+1 \rangle$

c) $F(x,y) = \langle y, x \rangle$

d) $F(x,y) = \langle 1, \sin(y) \rangle$



④ Use Maple to plot $F(x,y) = \langle y^2 - 2xy, 3xy - 6x^2 \rangle$

⑤ Find the curl (F) and div (F) for:

a) $\vec{F} = \langle xy^2, 0, -x^2y \rangle$

b) $\vec{F} = \langle x^2yz, xy^2z, xy^2z \rangle$

c) $\vec{F} = \langle e^x, e^{xy}, e^{xy^2} \rangle$

⑧ If $f: \mathbb{R}^3 \rightarrow \mathbb{R}$ is a function and $\vec{F}: \mathbb{R}^3 \rightarrow \mathbb{R}^3$ is a vector field, which expression is meaningful:

$$\text{curl}(f)$$

$$\text{grad}(f)$$

$$\text{div}(\vec{F})$$

$$\text{curl}(\text{grad}(f))$$

$$\text{grad}(\vec{F})$$

$$\text{grad}(\text{div}(\vec{F}))$$

$$\text{div}(\text{grad}(f))$$

$$\text{grad}(\text{div}(f))$$

$$\text{curl}(\text{curl}(\vec{F}))$$

$$\text{div}(\text{div}(\vec{F}))$$

$$(\text{grad}(f)) \times (\text{div}(\vec{F}))$$

$$\text{div}(\text{curl}(\text{grad}(f)))$$